

Extra
9/9/15

18 SEP 2015

ATOMIC ENERGY CENTRAL SCHOOL; KAKRAPAR
SUMMATIVE ASSESSMENT – I (2015-16)
Sub: Mathematics



Class: I
Name : _____
Roll No. : _____
Invigilator's Sign : _____
Examiner's sign : _____

Sec: _____
Date : ___/09/2015
Time : 2 hrs
M.M: 50
M.O :



I Do as directed :

1/2 x 10 = 5M

a) Tick the vessel on the bottom.




b) Tick the group that has 5 stars



c) Tick the activity that takes shorter time



Brushing teeth





Sleeping during night

d) Tick the figure (shape) similar to 



e) Tick the tree farthest from the house






f) Circle the smallest number.

13

17

8

g)



6

4

=

take away

left

h) 1 ten 7 ones = _____

i) One more than 6 is _____

