


Extra




24 SEP 2014, 1

Atomic Energy Central School, Kakrapar
SUMMATIVE ASSESSMENT I (2014-15)



CLASS : I Sub: MATHS Date: _____
Name: _____ Sect: _____ Roll No. _____
Invg Sign: _____ Exam. Sign: _____ M.M.50 M.O. _____

I. Choose the correct answer from the bracket and fill in the blanks. (4m)

- a) 1 ten and 5 ones is _____. (15, 16, 5)
- b) 6 comes after _____. (5, 7, 8)
- c)  and  make _____ feathers. (5, 7, 6)
- d) _____ + 2 = 4. (0, 4, 2)
- e) 11, _____, 13,. (complete the sequence) (15, 12, 14)
- f) I brush my teeth in the _____. (morning, evening)
- g) 10 - = 8 (4, 3, 2)
- h) a  can _____. (roll, slide)

II. Fill in the blanks.

(5 marks)

1) Write in words.

a) 19 _____

2) Write the number.

a) Seven _____

3) Write the missing numbers.

a) 10 _____ 12

4) What comes after 14, _____,

5) What comes before? _____, 8

6) $0 + 6 =$ _____

7) $9 - 9 =$ _____



9) $12 =$ _____ ten _____ ones

10) _____ + 7 = 10


III. Tick (✓) the right answer.

($\frac{1}{2} \times 10 = 5$ marks)


a) Tick (✓) the bigger.



b) Tick (✓) the smaller.



c) Tick (✓) the farthest child from the teacher.



d) Tick (✓) the bird on the top of the tree



e) Tick (✓) the parrot which is inside the cage.



