


Atomic Energy Central School- Kakrapar
Summative Assessment-I (September 2012)

Subject- Maths

Class I Sec. _____



Name _____

Time: 2 hrs

Roll no. _____

Invigilator's sign _____

Examiner's sign _____

M.M: 50

Checker's sign _____

Marks Obtaine _____

1. Fill in the blanks.

(5)

- a) $0+5=$ _____
- b) The number after 18 is _____
- c) $9 - 9=$ _____
- d) _____ comes between 12 and 14.
- e) The number before 9 is _____.
- f) Write in words: 12 _____
- g) $5+2=$ _____
- h) 1 ten and 9 ones = _____
- i) 1 ten and _____ ones = 17
- j) $10 - 0=$ _____.

2A. State True or False.

(3)

- a) The number 15 comes before 13 _____
- b) 3 is more than 7 _____
- c) The sum of 6 and 0 is 0 _____
- d) 4 birds and 2 birds = 6 birds _____
- e) $4 - 4 = 0$ _____
- f) 19 comes after 18. _____

2B. Add and match.

(3)

$3 + 5$



$6 + 3$

$4 + 6$

$0 + 2$

$5 + 1$

$4 + 3$




3. Do as directed.

(13)

a) Complete the sequence.

15 16 17 _____

b) Tick (✓) the smaller fruit.



c) Write the number.

Eleven = _____

Eighteen = _____

d) Count the number of balls.

