


23 SEP 2011



ATOMIC ENERGY CENTRAL SCHOOL, KAKRAPAR
Summative Assessment- I



Class: I Sub: Mathematics M.M.50
Name: _____ Sec. _____ Roll no: _____
Invigilator's sign: _____ Examiner's sign _____ Date: _____

I ANSWER THE FOLLOWING (EACH CARRY 1MARK)


a) Tick the object that rolls




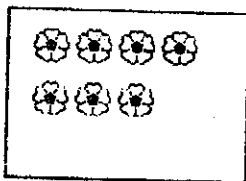
b) Tick the biggest square



c) Make a group of eight birds





d) Draw as many ☺ as the flowers



e) circle the object which is farthest from the sun



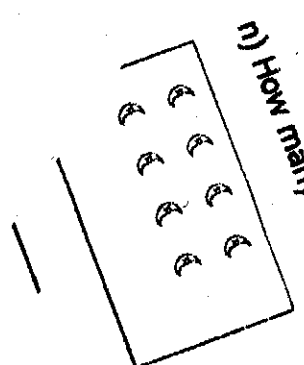
f) Colour the collection which has less objects




g) Fill in the gaps

S _ _ v _ _ n

_ _ l e v _ _ n



h) Make a group of 10 and write number



_____ ten _____ ones

i) Draw a similar shape

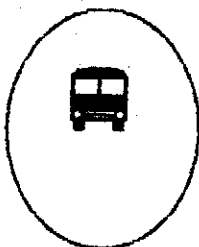


j) Circle the smallest number

3 7 9

19 14 17

k) tick the object which is inside the circle




l) Draw an apple on the top of the

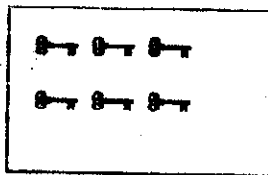


Take away


m)



-



=





-



=





How many altogether?



_____ = _____

o) Make the collection equal



_____ = _____

II Addition

5 marks

$$\begin{array}{r} 9 \\ +4 \\ \hline \end{array}$$

$$\begin{array}{r} 5 \\ +5 \\ \hline \end{array}$$

$$\begin{array}{r} 12 \\ +3 \\ \hline \end{array}$$

$$\begin{array}{r} 14 \\ +6 \\ \hline \end{array}$$

$$\begin{array}{r} 7 \\ +2 \\ \hline \end{array}$$

III Subtraction

5 marks

$$\begin{array}{r} 8 \\ -2 \\ \hline \end{array}$$

$$\begin{array}{r} 6 \\ -4 \\ \hline \end{array}$$

$$\begin{array}{r} 9 \\ -3 \\ \hline \end{array}$$

$$\begin{array}{r} 13 \\ -7 \\ \hline \end{array}$$

$$\begin{array}{r} 17 \\ -5 \\ \hline \end{array}$$

IV Write in words 2Marks

13 _____

17 _____

9 _____

15 _____

V Missing numerals

2marks

$$____ + 3 = 5$$

$$7 - 0 = ____$$

$$8 + ____ = 13$$

$$____ - 8 = 2$$

VI Draw bundles n sticks for the given number

2 Marks

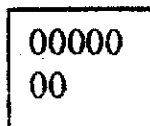
17 _____

14 = _____

VII Match

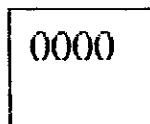
5M

$$5+3$$



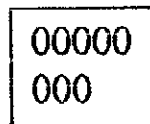
$$5-1$$

$$7+0$$



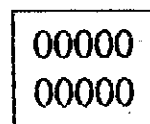
$$11-1$$

$$6+4$$




$$8-1$$

$$2+4$$



$$9-3$$

$$3+1$$

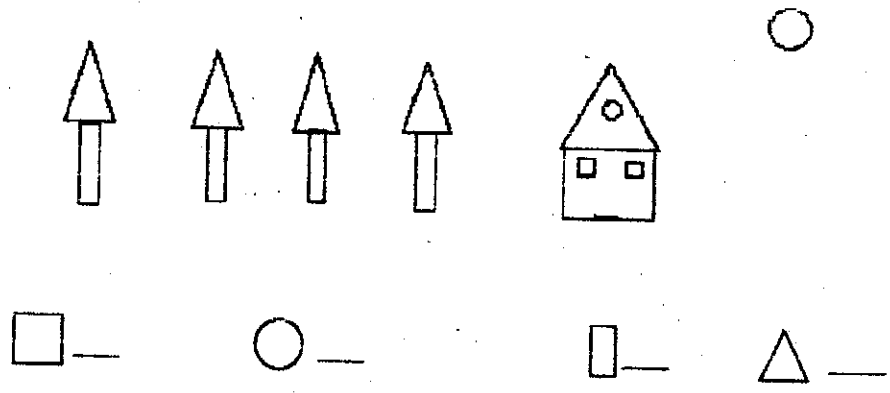


$$10-2$$



VIII count the shapes and write the number

2marks



VIII solve

8marks

1. Rohan had 3 pencils. Sohan had 5 pencils . How many pencils are together?

2. There are 9 birds sitting on a tree. 6 birds flew away. How many birds are there on the tree now?

3. Ram bought 4 biscuit packets from the shop. He gave 1 packet to his friend. How many biscuits packets are left with him?

4. Seema had 3 flowers. Rita had 6 flowers. They put them in a vase. How many flowers are together ?

VIII write in order

4marks

Go to bed	
breakfast	
sleep	
lunch	
Go to school	
Take a bath	
dinner	
Get up in the morning	